

Welcome back to Home schooling Year One! 😊

As always, it is not necessary to print out all of these slides so please read them through carefully so you can decide exactly which are needed as a paper copy.


Thank you.

Session 1

OMS: Number bonds to 10.

10 children are on a bus.

How many different ways can we split them between the top and bottom decks?



e.g $6 + 4$

WALT: Use language of equal to, more than and less than.

If Miss Lewis has 15 carrots and Mrs Wellings has 17.
Who has less?

Who has more?



My 0 to 30 Number Line



Archie has 12 pets, Charlie has 21 pets. Charlie thinks they have an equal number of pets.

Is he right?




Partner Talk:

If Mrs Rhodes has 8 dogs, Mrs Bradley has 7 dogs and Mrs Barrett has 5 dogs, who has the most?

Who has the least?





Which one has **most**? Which has **least**?



A


5 dogs

B



C

Which one has **most**? Which has **least**?



A

B

C

Which one has **most**? Which has **least**?

9 cakes



A

B

C

equal to

more than

less than

Sam has 9 packets of crisps, Sadie has 10.

Sadie has _____ Sam.

equal to

more than

less than

Owl caught 18 mice today, fox caught 17 mice.

Fox caught _____ Owl.

equal to

more than

less than

||

Dog has 16 bones, Bear has 16.

Bear is _____ Dog.

Tip: Work out the sum first!

equal to

more than

less than

12

$15 - 8$



My 0 to 30 Number Line



0 1 2 3 4 5 6 7 8 9 10 11 12 13 14 15 16 17 18 19 20 21 22 23 24 25 26 27 28 29 30



Tip: Work out the sum first!

equal to

more than

less than

8

$18 - 6$



My 0 to 30 Number Line



0 1 2 3 4 5 6 7 8 9 10 11 12 13 14 15 16 17 18 19 20 21 22 23 24 25 26 27 28 29 30



Tip: Work out the sum first!

equal to

more than

less than

8

$12 - 4$




My 0 to 30 Number Line




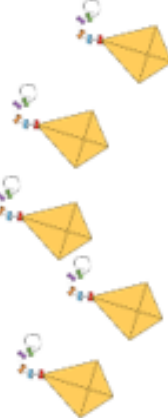
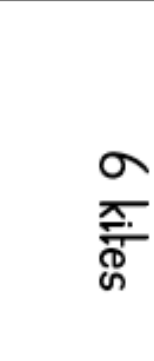

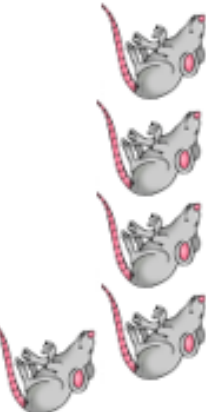








0 1 2 3 4 5 6 7 8 9 10 11 12 13 14 15 16 17 18 19 20 21 22 23 24 25 26 27 28 29 30





WALT: Use language of equal to, more than and less than.

Shade the box green that shows most; Shade the box blue that shows least.

		
<p>4 rats</p>		
	<p>8 suns</p>	
		<p>8 flowers</p>
	<p>3 pens</p>	
<p>2 clocks</p>		



WALT: Use language of **equal to**, **more than**, **less than**.

Spot has 5 bones, Jim has 8. Jim has _____ Spot.

Jill has 9 plants, Tom has 12 plants. Jill has _____ Tom.

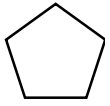
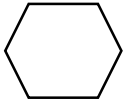
Phil has 18 cats, Mom has 13 cats. Mom has _____ Phil.

Chip has 16 bats, Chin has 19 bats. Chin has _____ Chip.

Rat has 14 traps, Dog has 14 traps. Dog is _____ Rat.

Ron has 19 trees, Sally has 17 trees. Ron has _____ Sally.

Billy has 18 cards, Sue has 18 cards. Sue is _____ Billy.



WALT: Use language of equal to, more than and less than.

10		12-5
9		14-8
14		19-4
18		19-7
13		19-6
16		17-6
19		18-11

Plenary: Can you guess what these symbols mean?

$$15 > 3$$

$$2 < 6$$

$$7 = 5 + 2$$